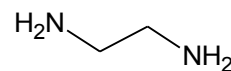
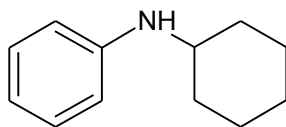
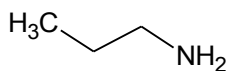




**U17:**

Name the following amines



**U20:**

Complete the following reaction equations:

